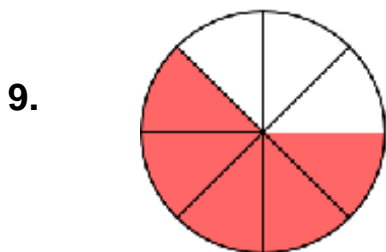

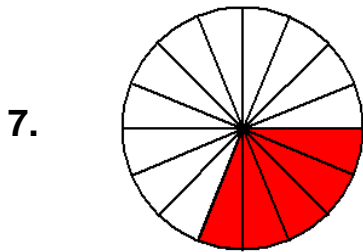
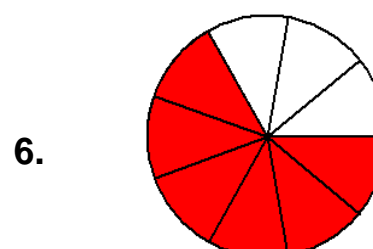
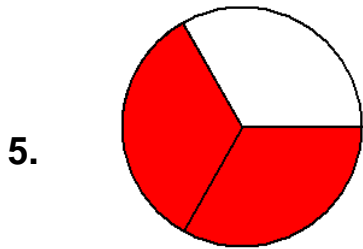
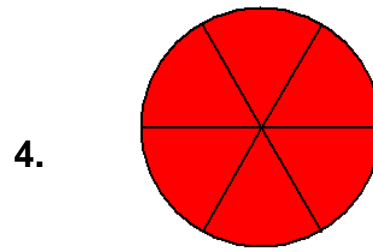
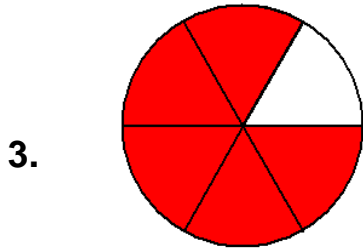
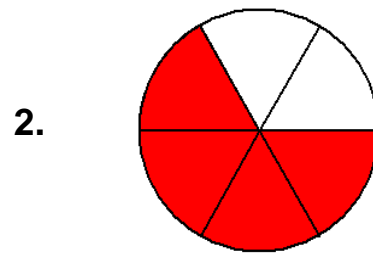
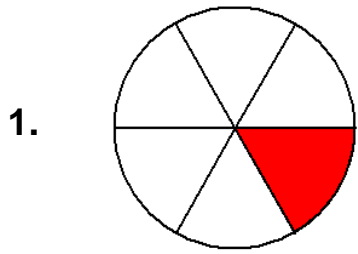


1. Numerator and Denominator with Circles

Name _____

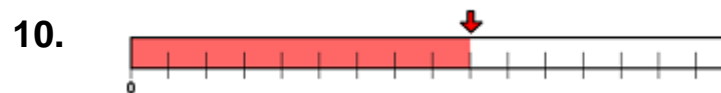
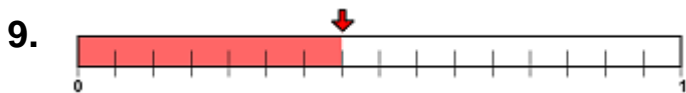
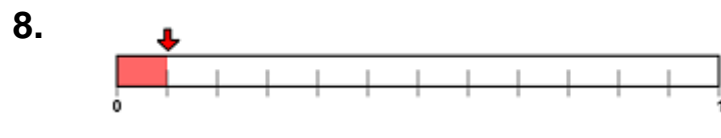
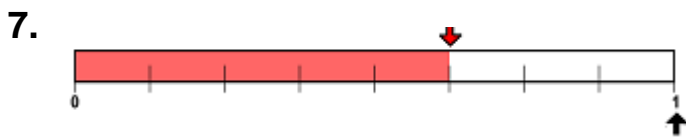
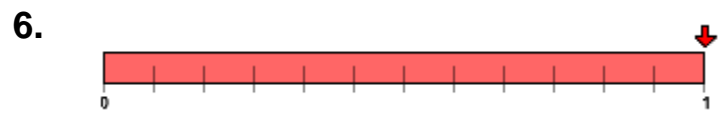
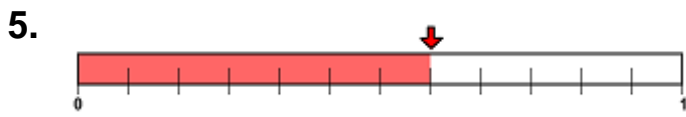
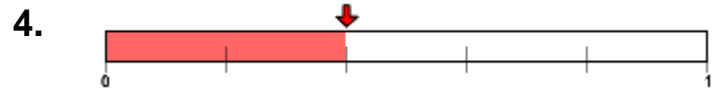

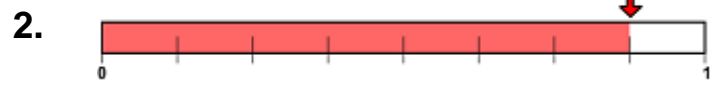
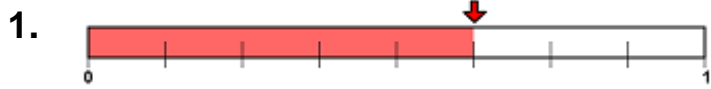
Write the numerator and denominator for the following:



2. Numerator and Denominator with Lines

Name _____

Write the numerator and denominator for the following:

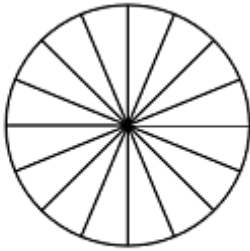


3. Numerator and Denominator with Circles

Name _____

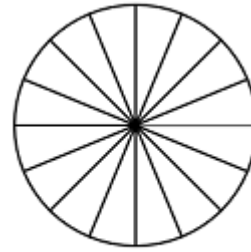
Shade the following as indicated:

1.



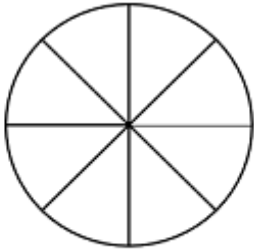
$\frac{5}{16}$ of the circle is shaded.

2.



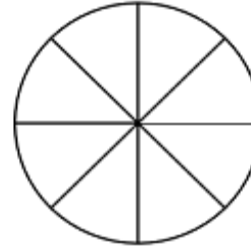
$\frac{15}{16}$ of the circle is shaded.

3.



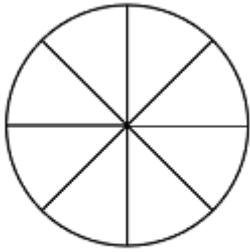
$\frac{7}{8}$ of the circle is shaded.

4.



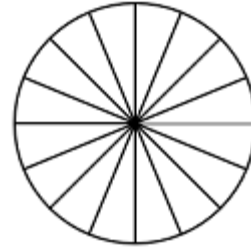
$\frac{1}{8}$ of the circle is shaded.

5.



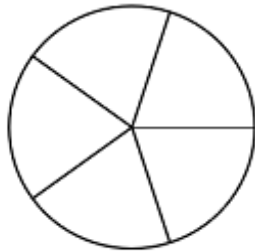
$\frac{6}{8}$ of the circle is shaded.

6.



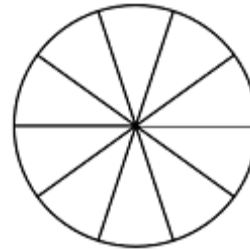
$\frac{10}{16}$ of the circle is shaded.

7.



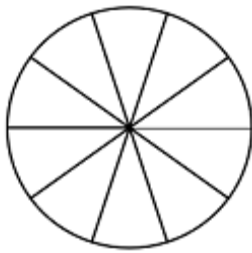
$\frac{3}{5}$ of the circle is shaded.

8.



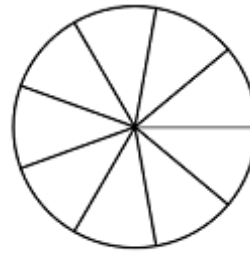
$\frac{3}{10}$ of the circle is shaded.

9.



$\frac{7}{10}$ of the circle is shaded.

10.



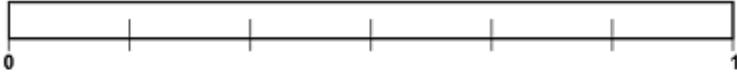
$\frac{7}{9}$ of the circle is shaded.

4. Numerator and Denominator with Lines

Name _____


Shade the following as indicated:

1.




$\frac{5}{6}$ of the distance from 0 to 1 is shaded.

2.




$\frac{5}{12}$ of the distance from 0 to 1 is shaded.

3.



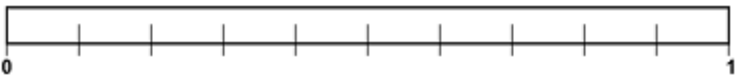
$\frac{4}{5}$ of the distance from 0 to 1 is shaded.

4.




$\frac{3}{5}$ of the distance from 0 to 1 is shaded.

5.



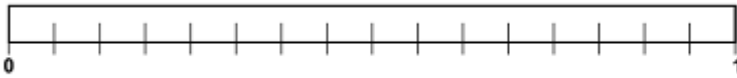
$\frac{4}{10}$ of the distance from 0 to 1 is shaded.

6.



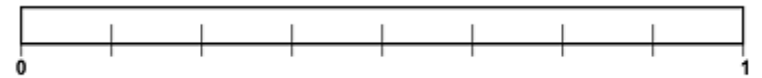
$\frac{2}{5}$ of the distance from 0 to 1 is shaded.

7.



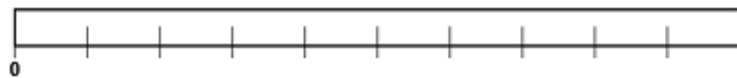
$\frac{3}{16}$ of the distance from 0 to 1 is shaded.

8.



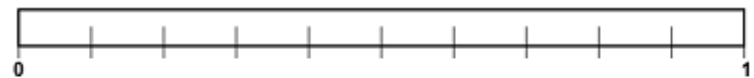
$\frac{3}{8}$ of the distance from 0 to 1 is shaded.

9.



$\frac{7}{10}$ of the distance from 0 to 1 is shaded.

10.




$\frac{3}{10}$ of the distance from 0 to 1 is shaded.

5. Numerator and Denominator with Circles and Lines

Name _____

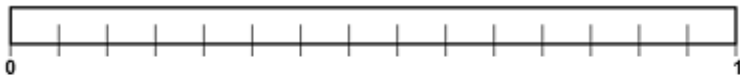
Shade the following as indicated:

1.



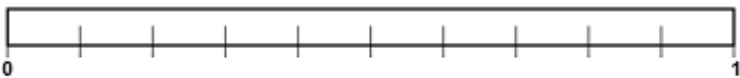
$\frac{9}{16}$ of the distance from 0 to 1 is shaded.

3.



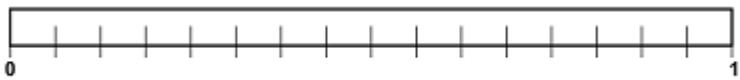
$\frac{9}{15}$ of the distance from 0 to 1 is shaded.

5.



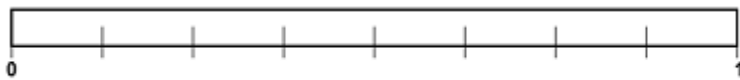
$\frac{9}{10}$ of the distance from 0 to 1 is shaded.

7.



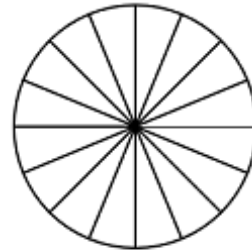
$\frac{7}{16}$ of the distance from 0 to 1 is shaded.

9.



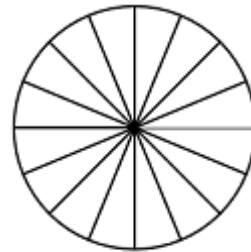
$\frac{5}{8}$ of the distance from 0 to 1 is shaded.

2.



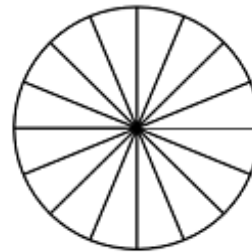
$\frac{9}{16}$ of the circle is shaded.

4.



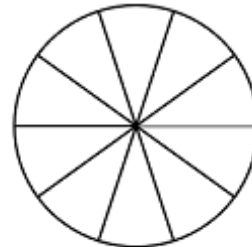
$\frac{11}{16}$ of the circle is shaded.

6.



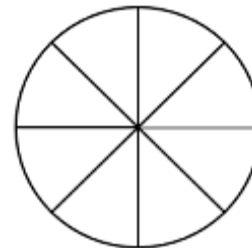
$\frac{15}{16}$ of the circle is shaded.

8.



$\frac{7}{10}$ of the circle is shaded.

10.



$\frac{3}{8}$ of the circle is shaded.